

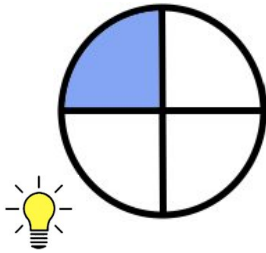
Name: _____ Klasse: _____ Datum: _____

Brüche bestimmen

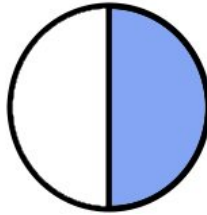
ARBEITSBLATT 1

Jeder Kreis stellt einen Bruch dar. Schreibe den Bruch auf.

a)



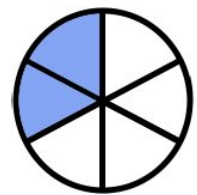
$$\frac{1}{4}$$



—

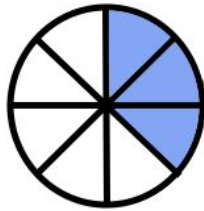


—

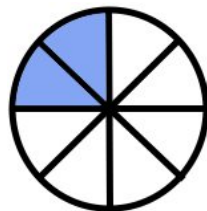


—

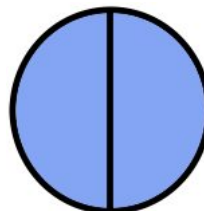
b)



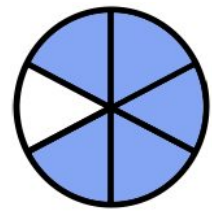
—



—

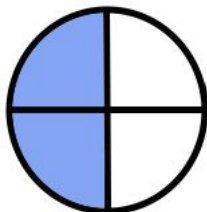


—

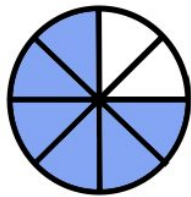


—

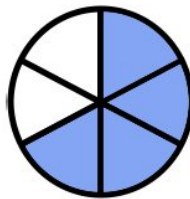
c)



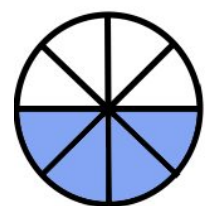
—



—

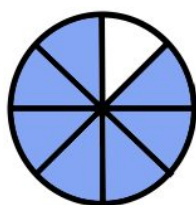


—



—

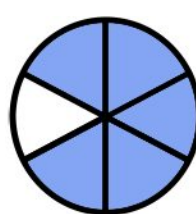
d)



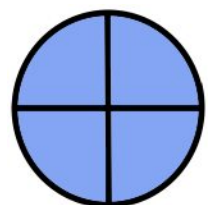
—



—



—



—

Name: _____ Klasse: _____ Datum: _____

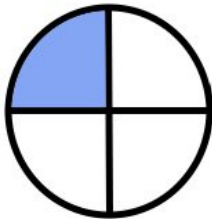
Brüche bestimmen

LÖSUNG ARBEITSBLATT 1

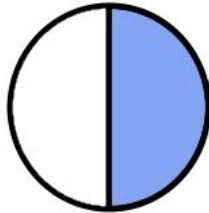
Jeder Kreis stellt einen Bruch dar. Schreibe den Bruch auf.

Aufgabe 1

a)



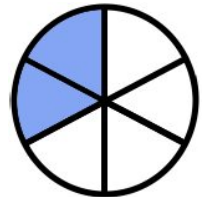
$$\frac{1}{4}$$



$$\frac{1}{2}$$



$$\frac{2}{3}$$

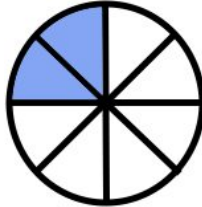


$$\frac{2}{6}$$

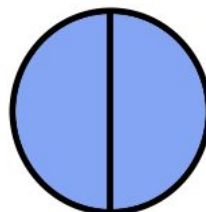
b)



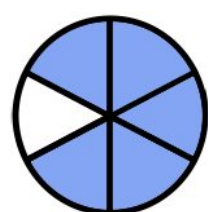
$$\frac{3}{8}$$



$$\frac{2}{8}$$




$$\frac{2}{2}$$

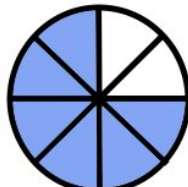


$$\frac{5}{6}$$

c)



$$\frac{2}{4}$$



$$\frac{6}{8}$$

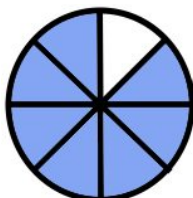


$$\frac{4}{6}$$



$$\frac{4}{8}$$

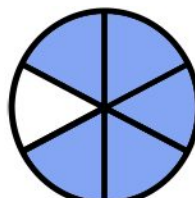
d)



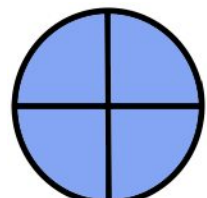
$$\frac{7}{8}$$



$$\frac{3}{3}$$



$$\frac{5}{6}$$



$$\frac{4}{4}$$