

Name: _____ Klasse: _____ Datum: _____

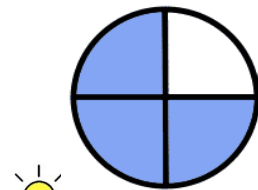
Brüche bestimmen

ARBEITSBLATT 4


Jeder Kreis stellt einen Bruch dar. Schreibe den Nenner zu jedem Bruch auf. Male den Kreis so aus, dass der Bruch stimmt.

Aufgabe 1

a)



$$\frac{3}{4}$$



$$\frac{\quad}{5}$$




$$\frac{\quad}{4}$$




$$\frac{\quad}{1}$$


b)



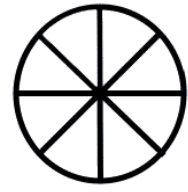
$$\frac{\quad}{5}$$



$$\frac{\quad}{3}$$




$$\frac{\quad}{1}$$

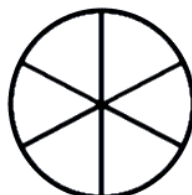


$$\frac{\quad}{5}$$


c)




$$\frac{\quad}{8}$$



$$\frac{\quad}{3}$$



$$\frac{\quad}{2}$$




$$\frac{\quad}{4}$$

d)



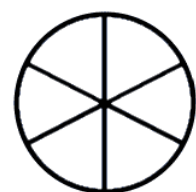
$$\frac{\quad}{3}$$



$$\frac{\quad}{7}$$



$$\frac{\quad}{2}$$



$$\frac{\quad}{5}$$

Name: _____ Klasse: _____ Datum: _____

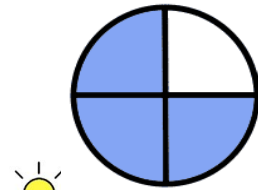
Brüche bestimmen

LÖSUNG ARBEITSBLATT 4


Jeder Kreis stellt einen Bruch dar. Schreibe den Nenner zu jedem Bruch auf. Male den Kreis so aus, dass der Bruch stimmt.

Aufgabe 1

a)



$$\frac{3}{4}$$



$$\frac{5}{8}$$




$$\frac{4}{5}$$




$$\frac{1}{3}$$

b)



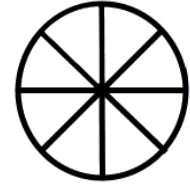
$$\frac{5}{10}$$



$$\frac{3}{4}$$




$$\frac{1}{2}$$



$$\frac{5}{8}$$

c)




$$\frac{8}{10}$$



$$\frac{3}{6}$$



$$\frac{2}{4}$$




$$\frac{4}{10}$$

d)



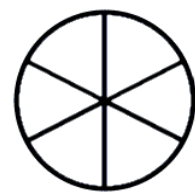
$$\frac{3}{6}$$



$$\frac{7}{10}$$



$$\frac{2}{5}$$



$$\frac{5}{6}$$