

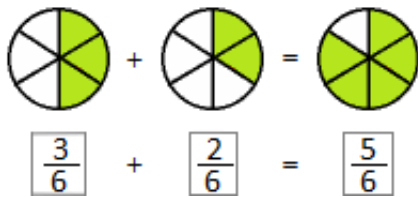
Name: \_\_\_\_\_ Klasse: \_\_\_\_\_ Datum: \_\_\_\_\_

**Brüche addieren**

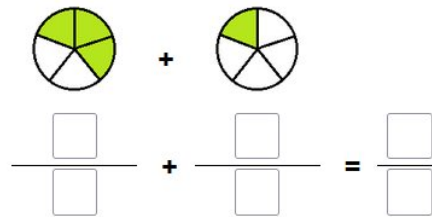
**ARBEITSBLATT 6**

Addiere gleichnamige Brüche, ohne Kürzen.

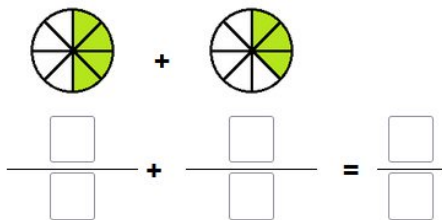
**Aufgabe 1**



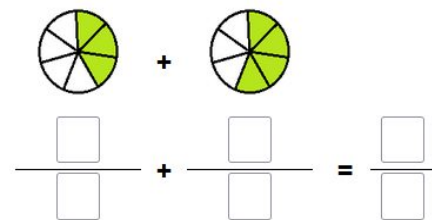
**Aufgabe 2**



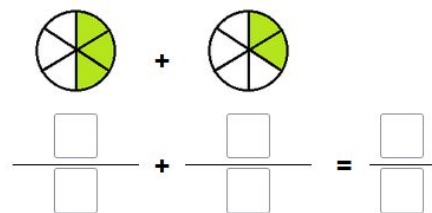
**Aufgabe 3**



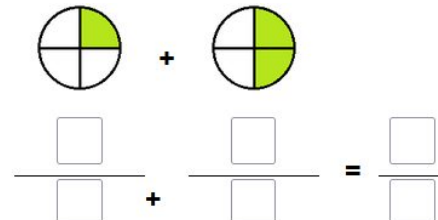
**Aufgabe 4**



**Aufgabe 5**



**Aufgabe 6**



**Aufgabe 7**

$$\frac{14}{20} + \frac{5}{20} = \frac{\square}{\square}$$

**Aufgabe 8**

$$\frac{4}{100} + \frac{5}{100} = \frac{\square}{\square}$$

**Aufgabe 9**

$$\frac{50}{100} + \frac{25}{100} = \frac{\square}{\square}$$

**Aufgabe 10**

$$\frac{14}{20} + \frac{5}{20} = \frac{\square}{\square}$$

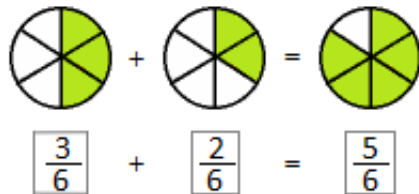
Name: \_\_\_\_\_ Klasse: \_\_\_\_\_ Datum: \_\_\_\_\_

**Brüche addieren**

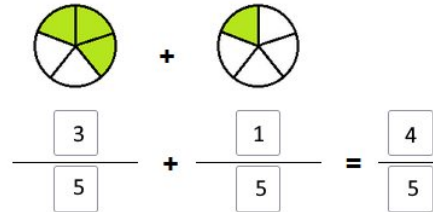
**LÖSUNGEN ARBEITSBLATT 6**

Addiere gleichnamige Brüche, ohne Kürzen.

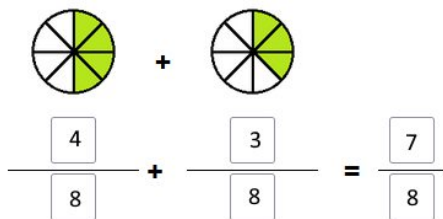
**Aufgabe 1**



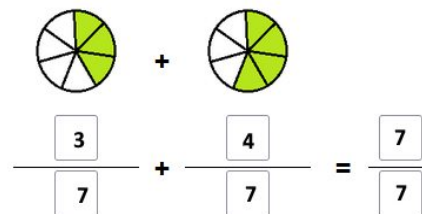
**Aufgabe 2**



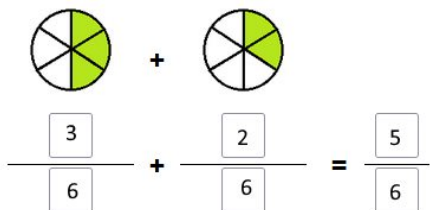
**Aufgabe 3**



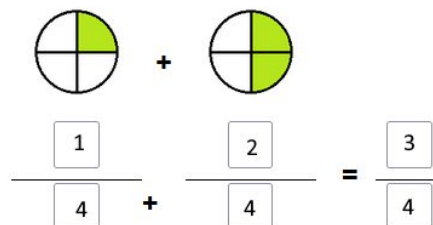
**Aufgabe 4**



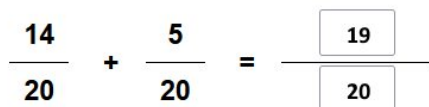
**Aufgabe 5**



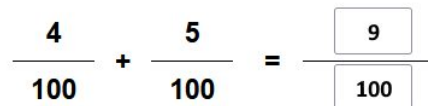
**Aufgabe 6**



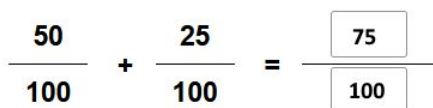
**Aufgabe 7**



**Aufgabe 8**



**Aufgabe 9**



**Aufgabe 10**

